



Count & Represent Objects 1–10

Name: _____

Date: _____

Grade: Grade 1

Part A: Count the Objects

Count the objects in each box. Write the number on the line.

1. Count the dogs.



How many? _____

2. Count the stars.



How many? _____

3. Count the apples.



How many? _____

4. Count the balloons.



How many? _____

Part B: Fill in the Number

Write the missing number on the line.

1. 1, 2, _____, 4, 5.

2. 5, 6, 7, _____, 9.

3. _____, 2, 3, 4, 5.

4. One more than 8 is _____.

Part A: Count the Objects

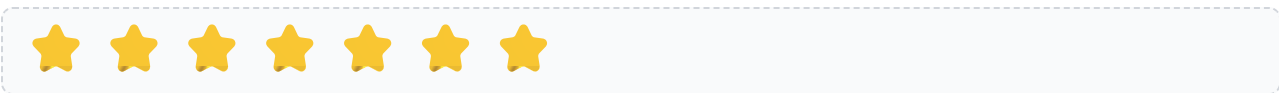
Count the objects in each box. Write the number on the line.

1. Count the dogs.



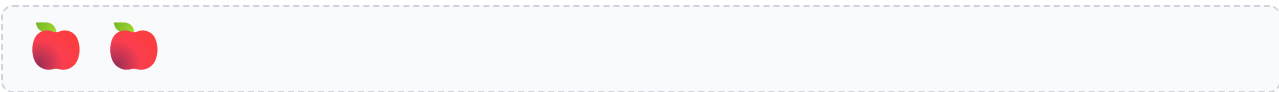
How many? 4

2. Count the stars.




How many? 7

3. Count the apples.



How many? 2

4. Count the balloons.



How many? 9

Part B: Fill in the Number

Write the missing number on the line.

1. 1, 2, 3, 4, 5.

2. 5, 6, 7, 8, 9.

3. 1, 2, 3, 4, 5.

4. One more than 8 is 9.