



# Count & Represent Objects 1–10

Name: \_\_\_\_\_


Date: \_\_\_\_\_

Grade: Grade 1

## Part A: Count the Objects

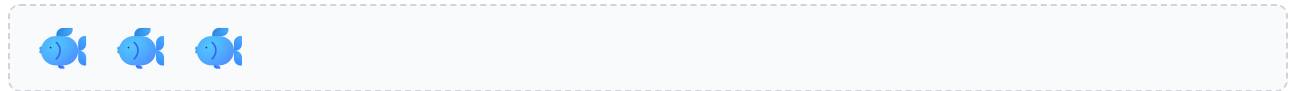
Count the objects in each box. Write the number on the line.

1. Count the cats.




How many? \_\_\_\_\_

2. Count the fish.




How many? \_\_\_\_\_

3. Count the birds.



How many? \_\_\_\_\_

4. Count the frogs.



How many? \_\_\_\_\_

## Part B: Fill in the Number

Write the missing number on the line.

1. 2, 3, \_\_\_\_\_, 5, 6.

2. 6, 7, 8, \_\_\_\_\_, 10.

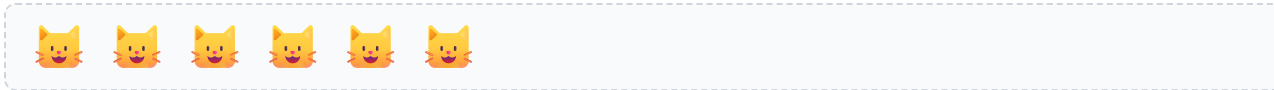
3. \_\_\_\_\_, 4, 5, 6, 7.

4. One more than 5 is \_\_\_\_\_.

### Part A: Count the Objects

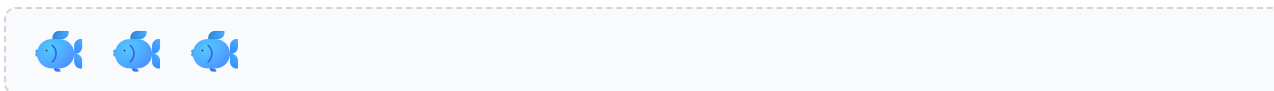
Count the objects in each box. Write the number on the line.

1. Count the cats.



How many? 6

2. Count the fish.



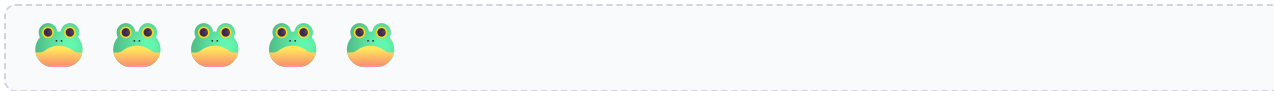
How many? 3

3. Count the birds.



How many? 8

4. Count the frogs.



How many? 5

### Part B: Fill in the Number

Write the missing number on the line.

1. 2, 3, 4, 5, 6.

2. 6, 7, 8, 9, 10.

3. 3, 4, 5, 6, 7.

4. One more than 5 is 6.