



Count & Represent Objects 1–10

Name: _____

Date: _____

Grade: Kindergarten

Part A: Count the Objects

Count the objects in each box. Write the number on the line.

1. Count the stars.



How many? _____

2. Count the apples.



How many? _____

3. Count the fish.



How many? _____

4. Count the balloons.



How many? _____

Part B: Fill in the Number

Write the missing number on the line.

1. 1, 2, _____, 4.

2. 3, 4, 5, _____.

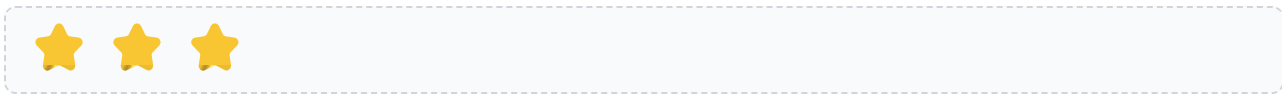
3. _____, 2, 3, 4.

4. One more than 4 is _____.

Part A: Count the Objects

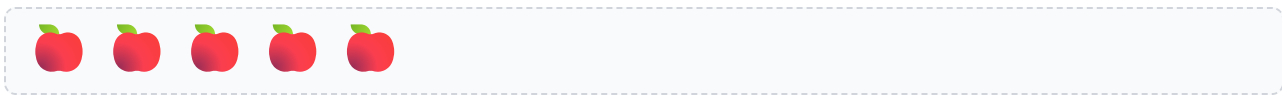
Count the objects in each box. Write the number on the line.

1. Count the stars.



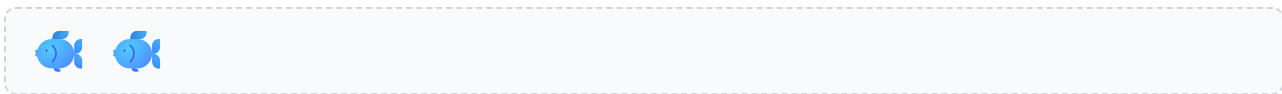
How many? 3

2. Count the apples.



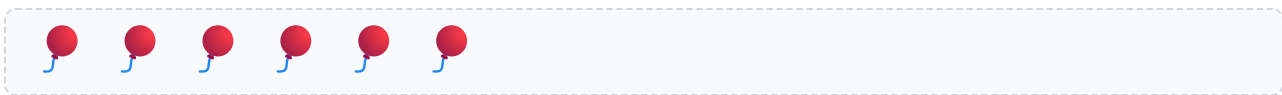
How many? 5

3. Count the fish.



How many? 2

4. Count the balloons.



How many? 6

Part B: Fill in the Number

Write the missing number on the line.

1. 1, 2, 3, 4.

2. 3, 4, 5, 6.

3. 1, 2, 3, 4.

4. One more than 4 is 5.