



Count & Represent Objects 1–10

Name: _____


Date: _____

Grade: Kindergarten

Part A: Count the Objects

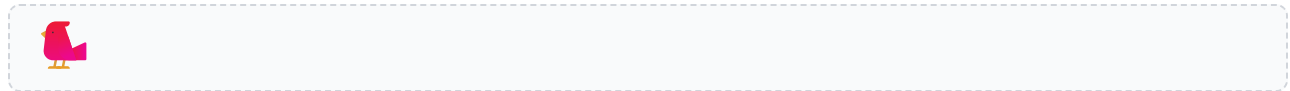
Count the objects in each box. Write the number on the line.

1. Count the hearts.



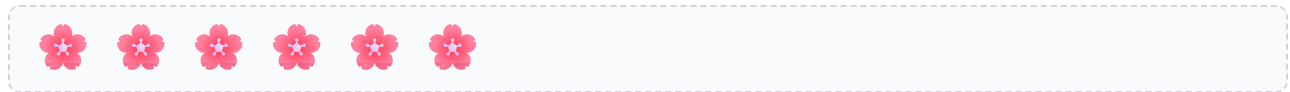
How many? _____

2. Count the birds.



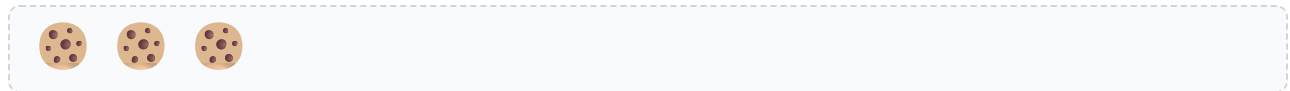
How many? _____

3. Count the flowers.



How many? _____

4. Count the cookies.



How many? _____

Part B: Fill in the Number

Write the missing number on the line.

- 4, 5, _____, 7.
- 1, _____, 3, 4.
- One less than 3 is _____.
- If you count 5 stars, the last number you say is _____.

Part A: Count the Objects

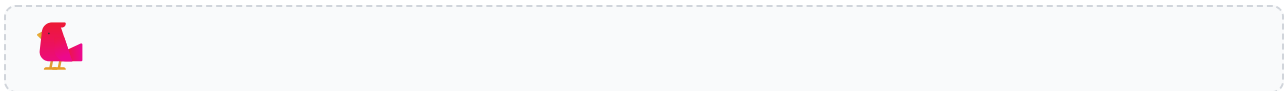
Count the objects in each box. Write the number on the line.

1. Count the hearts.



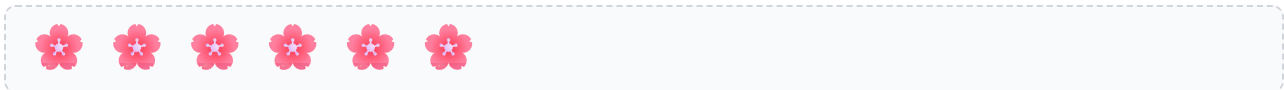
How many? 4

2. Count the birds.



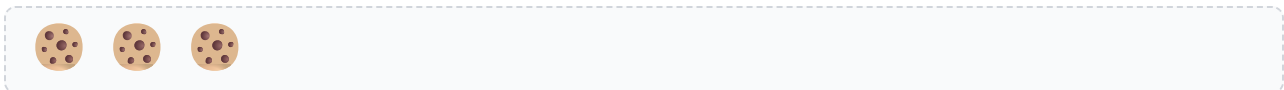
How many? 1

3. Count the flowers.



How many? 6

4. Count the cookies.



How many? 3

Part B: Fill in the Number

Write the missing number on the line.

1. 4, 5, 6, 7.

2. 1, 2, 3, 4.

3. One less than 3 is 2.

4. If you count 5 stars, the last number you say is 5.